

# Fun With Math

Complete by finding the value of each symbol

$$\text{Owl} \times \text{Mushroom} = 18$$

$$\text{Owl} \div \text{Mushroom} = 2$$

$$\text{Owl} + \text{Mushroom} = ?$$

$$\text{Owl} = \underline{\quad}$$

$$\text{Mushroom} = \underline{\quad}$$



$$\text{Pig} \times 5 = \text{Cat}$$

$$\text{Cat} \div 10 = 2$$

$$\text{Cat} - \text{Pig} = ?$$







$$\text{Cat} = \underline{\quad}$$



$$\text{Pig} = \underline{\quad}$$









# Answer Key



Complete by finding the value of each symbol

	6	x		3	=	18
	6	÷		3	=	2
	6	+		3	=	9

	=	<u>6</u>
	=	<u>3</u>



	4	x	5	=		20
	20	÷	10	=	2	
	20	-		4	=	16

	=	<u>20</u>
	=	<u>4</u>

