

Fun With Math

Complete by finding the value of each symbol

$$8 \times \text{Envelope} = 56$$

$$\text{Briefcase} \div 2 = 8$$

$$\text{Briefcase} - \text{Envelope} = ?$$

$$\text{Briefcase} = \underline{\quad}$$

$$\text{Envelope} = \underline{\quad}$$



$$\text{House} \div 4 = \text{Lock}$$

$$\text{Lock} \div 2 = 6$$

$$\text{House} \div \text{Lock} = ?$$





$$\text{Lock} = \underline{\quad}$$

$$\text{House} = \underline{\quad}$$



Answer Key

Complete by finding the value of each symbol



8	x		=	56
	÷	2	=	8
	-		=	9


7






16

16

7

	=	<u>16</u>
	=	<u>7</u>





	÷	4	=	
	÷	2	=	6
	÷		=	4

48

12

48

12

	=	<u>12</u>
	=	<u>48</u>

