

# Fun With Math



Complete by finding the value of each symbol



x

3

=



÷


9

=

4



+



=

?



=

—



=

—



x

4

=



÷

5

=

8



÷



=

?



=

—








=



—









# Answer Key


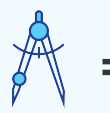
Complete by finding the value of each symbol

	<b>12</b>	<b>x</b>	<b>3</b>	<b>=</b>		<b>36</b>
	<b>36</b>	<b>÷</b>	<b>9</b>	<b>=</b>	<b>4</b>	
	<b>12</b>	<b>+</b>		<b>=</b>	<b>48</b>	

	<b>=</b>	<b>12</b>
	<b>=</b>	<b>36</b>



	<b>10</b>	<b>x</b>	<b>4</b>	<b>=</b>		<b>40</b>
	<b>40</b>	<b>÷</b>	<b>5</b>	<b>=</b>	<b>8</b>	
	<b>40</b>	<b>÷</b>		<b>=</b>	<b>4</b>	

	<b>=</b>	<b>40</b>
	<b>=</b>	<b>10</b>

