

# Fun With Math

Complete by finding the value of each symbol



x



=

60



÷

3

=

4



-



=

?



=



=



x

4

=



÷

6

=

2



÷



=

?



=










=









# Answer Key



Complete by finding the value of each symbol

	<b>5</b>	<b>x</b>		<b>12</b>	<b>=</b>	<b>60</b>
	<b>12</b>	<b>÷</b>	<b>3</b>	<b>=</b>	<b>4</b>	
	<b>12</b>	<b>-</b>		<b>5</b>	<b>=</b>	<b>7</b>

	<b>=</b>	<u><b>5</b></u>
	<b>=</b>	<u><b>12</b></u>



	<b>3</b>	<b>x</b>	<b>4</b>	<b>=</b>		<b>12</b>
	<b>12</b>	<b>÷</b>	<b>6</b>	<b>=</b>	<b>2</b>	
	<b>12</b>	<b>÷</b>		<b>3</b>	<b>=</b>	<b>4</b>

	<b>=</b>	<u><b>12</b></u>
	<b>=</b>	<u><b>3</b></u>

