

# Fun With Math

Complete by finding the value of each symbol

$$\text{Sun} \div \text{Lightbulb} = 4$$

$$\text{Sun} \div 2 = 24$$

$$\text{Lightbulb} \div 4 = ?$$

$$\text{Sun} = \underline{\quad}$$

$$\text{Lightbulb} = \underline{\quad}$$



$$\text{Tree} \times 5 = \text{Leaf}$$

$$\text{Leaf} \div 10 = 3$$

$$\text{Leaf} \div \text{Tree} = ?$$





$$\text{Leaf} = \underline{\quad}$$



$$\text{Tree} = \underline{\quad}$$









# Answer Key



Complete by finding the value of each symbol

	$\div$		$=$	4
48				
	$\div$	2	$=$	24
48				
	$\div$	4	$=$	3
12				

	$=$	<u>48</u>
	$=$	<u>12</u>



	$\times$	5	$=$	
6				30
	$\div$	10	$=$	3
30				
	$\div$		$=$	5
30		6		

	$=$	<u>30</u>
	$=$	<u>6</u>

