

Fun With Math

Complete by finding the value of each symbol

$$\text{burger} + \text{cupcake} = \text{cookie} - 0$$

$$\text{cupcake} + \text{cupcake} + \text{ice cream} = 11$$

$$\text{cupcake} + \text{cupcake} = 8 \quad \square \quad \square$$

$$\text{burger} + \text{ice cream} = 8 \quad \square \quad \square$$

$$\text{cookie} + \text{cookie} + \text{ice cream} = ?$$

$\text{cookie} = \underline{\hspace{2cm}}$

$\text{burger} = \underline{\hspace{2cm}}$

$\text{cupcake} = \underline{\hspace{2cm}}$

$\text{ice cream} = \underline{\hspace{2cm}}$



Answer Key

Complete by finding the value of each symbol


$$\begin{array}{|c|c|c|c|c|c|} \hline \text{5} & + & \text{4} & = & \text{9} & - & 0 \\ \hline \text{burger} & & \text{cupcake} & & \text{cookie} & & \\ \hline \end{array}$$


$$\begin{array}{|c|c|c|c|c|c|} \hline \text{4} & + & \text{4} & + & \text{3} & = & 11 \\ \hline \text{cupcake} & & \text{cupcake} & & \text{ice cream} & & \\ \hline \end{array}$$


$$\begin{array}{|c|c|c|c|c|c|c|} \hline \text{4} & + & \text{4} & = & 8 & & \\ \hline \text{cupcake} & & \text{cupcake} & & & & \\ \hline \end{array}$$


$$\begin{array}{|c|c|c|c|c|c|c|} \hline \text{5} & + & \text{3} & = & 8 & & \\ \hline \text{burger} & & \text{ice cream} & & & & \\ \hline \end{array}$$

$$\begin{array}{|c|c|c|c|c|c|c|} \hline \text{9} & + & \text{9} & + & \text{3} & = & 21 \\ \hline \text{cookie} & & \text{cookie} & & \text{ice cream} & & \\ \hline \end{array}$$

 = 9

 = 5

 = 4

 = 3

