

# Fun With Math

Complete by finding the value of each symbol

$$\text{trophy} + \text{trophy} + \text{trophy} = \text{graduation cap}$$

$$\text{graduation cap} + \text{graduation cap} = \text{crown}$$

$$\text{trophy} + \text{shield} + \text{shield} = 15$$

$$\text{shield} + \text{shield} = 12$$

$$\text{crown} - \text{shield} = ?$$

trophy = \_\_\_\_\_

graduation cap = \_\_\_\_\_

crown = \_\_\_\_\_

shield = \_\_\_\_\_



# Answer Key

Complete by finding the value of each symbol


$$\begin{array}{|c|c|c|c|c|c|} \triple \td{3} \td{+} \td{3} \td{+} \td{3} \td{=} \td{9} \end{array}$$


$$\begin{array}{|c|c|c|c|c|c|} \triple \td{9} \td{+} \td{9} \td{=} \td{18} \td{\quad} \td{\quad} \end{array}$$


$$\begin{array}{|c|c|c|c|c|c|} \triple \td{3} \td{+} \td{6} \td{+} \td{6} \td{=} \td{15} \end{array}$$


$$\begin{array}{|c|c|c|c|c|c|} \triple \td{6} \td{+} \td{6} \td{=} \td{12} \td{\quad} \td{\quad} \end{array}$$

$$\begin{array}{|c|c|c|c|c|c|} \triple \td{18} \td{-} \td{6} \td{=} \td{12} \td{\quad} \td{\quad} \end{array}$$

 = 3

 = 9

 = 18

 = 6

