

Fun With Math

Complete by finding the value of each symbol

$$\text{Headphones} + \text{Headphones} + 4 = 6$$

$$\text{Megaphone} + \text{Bell} = 9$$

$$\text{Bell} - \text{Megaphone} = \text{Bell}$$

$$\text{Bell} + \text{Bell} + \text{Bell} = ?$$

$$\text{Headphones} + \text{Bell} = 8$$

$$\text{Bell} = \underline{\quad}$$

$$\text{Bell} = \underline{\quad}$$

$$\text{Headphones} = \underline{\quad}$$

$$\text{Megaphone} = \underline{\quad}$$

Answer Key

Complete by finding the value of each symbol


$$\text{Headphones} + \text{Headphones} + 4 = 6$$


$$\text{Megaphone} + \text{Bell} = 9$$


$$\text{Bell} - \text{Megaphone} = \text{Bell}$$


$$\text{Bell} + \text{Bell} + \text{Bell} = 19$$

$$\text{Headphones} + \text{Bell} = 8$$

 = 5

 = 7

 = 1

 = 2

