

Fun With Math

Complete by finding the value of each symbol

$$\text{Yellow Bird} \times \text{Purple Bird} = 120$$

$$6 \times \text{Pink Bird} = 48$$

$$\text{Pink Bird} \times \text{Yellow Bird} = 96$$

$$\text{Purple Bird} \times \text{Pink Bird} = ?$$

$$\text{Yellow Bird} = \underline{\quad}$$

$$\text{Purple Bird} = \underline{\quad}$$

$$\text{Pink Bird} = \underline{\quad}$$



$$\text{Blue Moon} \times \text{Green Puzzle} = 48$$

$$\text{Red Tag} \times \text{Blue Moon} = 30$$

$$\text{Green Puzzle} \times 4 = 32$$

$$\text{Red Tag} \times \text{Green Puzzle} = ?$$

$$\text{Green Puzzle} = \underline{\quad}$$

$$\text{Blue Moon} = \underline{\quad}$$

$$\text{Red Tag} = \underline{\quad}$$



Answer Key

Complete by finding the value of each symbol








 12	X	 10	=	120
6	X	 8	=	48
 8	X	 12	=	96
 10	X	 8	=	80

$$\text{Yellow chicken} = \underline{12}$$

$$\text{Purple bird} = \underline{10}$$

$$\text{Pink bird} = \underline{8}$$



 6	X	 8	=	48
 5	X	 6	=	30
 8	X	4	=	32
 5	X	 8	=	40

$$\text{Green puzzle piece} = \underline{8}$$

$$\text{Blue crescent moon} = \underline{6}$$

$$\text{Orange tag} = \underline{5}$$

