











Fun with Math

Find the value of each symbol and complete the multiplication table

| | | | |
|---|---|---|---|
| |  |  |  |
|  | 81 | ? | 90 |
|  | ? | ? | ? |
|  | 27 | 6 | ? |

| | | |
|--|---|-------|
|  | = | _____ |
|  | = | _____ |
|  | = | _____ |
|  | = | _____ |





| | | | |
|---|---|---|---|
| |  |  |  |
|  | 35 | ? | ? |
|  | 20 | ? | 4 |
|  | ? | ? | 1 |

| | | |
|---|---|-------|
|  | = | _____ |
|  | = | _____ |
|  | = | _____ |
|  | = | _____ |







Answer Key

Find the value of each symbol and complete the multiplication table

| | | | |
|---|---|---|---|
| |  |  |  |
|  | 81 | 18 | 90 |
|  | 90 | 20 | 100 |
|  | 27 | 6 | 30 |

| | | |
|--|---|-----------|
|  | = | <u>9</u> |
|  | = | <u>10</u> |
|  | = | <u>3</u> |
|  | = | <u>2</u> |

| | | | |
|---|---|---|---|
| |  |  |  |
|  | 35 | 28 | 7 |
|  | 20 | 16 | 4 |
|  | 5 | 4 | 1 |

| | | |
|---|---|----------|
|  | = | <u>5</u> |
|  | = | <u>4</u> |
|  | = | <u>1</u> |
|  | = | <u>7</u> |

