



Fun With Math

Find the value of each symbol and complete the multiplication table

Legend:   

	?	?	5
	100	?	50
	?	?	10

Equations:

-  = _____
-  = _____
-  = _____
-  = _____

Legend:   

	?	?	49
	25	20	?
	?	24	?

Equations:





-  = _____
-  = _____
-  = _____
-  = _____



Answer Key

Find the value of each symbol and complete the multiplication table

			
	10	2	5
	100	20	50
	20	4	10

	=	<u>10</u>
	=	<u>2</u>
	=	<u>5</u>
	=	<u>1</u>

			
	35	28	49
	25	20	35
	30	24	42

	=	<u>4</u>
	=	<u>5</u>
	=	<u>6</u>
	=	<u>7</u>

