

# Fun with Math

Find the value of each symbol and complete the multiplication table

			
	?	32	24
	?	?	?
	100	?	60


  

 = _____
 = _____
 = _____
 = _____

			
	4	?	?
	?	45	?
	?	35	49







  

 = _____
 = _____
 = _____
 = _____



# Answer Key

Find the value of each symbol and complete the multiplication table

			
	40	32	24
	60	48	36
	100	80	60

	=	<u>6</u>
	=	<u>4</u>
	=	<u>8</u>
	=	<u>10</u>

			
	4	10	14
	18	45	63
	14	35	49

	=	<u>2</u>
	=	<u>7</u>
	=	<u>5</u>
	=	<u>9</u>

