

# Fun With Math




Find the value of each symbol and complete the multiplication table





Star, Cloud, Moon


	20	?	16
	?	25	?
	?	40	?

 = \_\_\_\_\_  
 = \_\_\_\_\_  
 = \_\_\_\_\_  
 = \_\_\_\_\_

Building, Castle, House

	?	?	?
	?	9	81
	42	?	54

 = \_\_\_\_\_  
 = \_\_\_\_\_  
 = \_\_\_\_\_  
 = \_\_\_\_\_













# Answer Key

Find the value of each symbol and complete the multiplication table

			
	20	10	16
	50	25	40
	80	40	64

	=	<u>2</u>
	=	<u>5</u>
	=	<u>8</u>
	=	<u>10</u>

			
	7	1	9
	63	9	81
	42	6	54

	=	<u>1</u>
	=	<u>9</u>
	=	<u>7</u>
	=	<u>6</u>

