












Fun with Math

Find the value of each symbol and complete the multiplication table

			
	?	15	24
	20	?	?
	16	?	?

	=	_____
	=	_____
	=	_____
	=	_____

			
	0	?	?
	?	18	4
	?	?	10

	=	_____
	=	_____
	=	_____
	=	_____







Answer Key

Find the value of each symbol and complete the multiplication table







12	15	24
20	25	40
16	20	32

 = <u>3</u>
 = <u>5</u>
 = <u>8</u>
 = <u>4</u>



0	81	18
0	18	4
0	45	10

 = <u>0</u>
 = <u>9</u>
 = <u>2</u>
 = <u>5</u>

