








# Fun With Math

Find the value of each symbol and complete the multiplication table

			
	16	?	28
	?	?	0
	24	?	?

	=	_____
	=	_____
	=	_____
	=	_____







			
	?	6	4
	?	?	?
	40	30	?

	=	_____
	=	_____
	=	_____
	=	_____













# Answer Key

Find the value of each symbol and complete the multiplication table

			
	16	24	28
	0	0	0
	24	36	42

	=	<u>7</u>
	=	<u>0</u>
	=	<u>4</u>
	=	<u>6</u>

			
	8	6	4
	12	9	6
	40	30	20

	=	<u>3</u>
	=	<u>2</u>
	=	<u>4</u>
	=	<u>10</u>

