

Fun with Math

Find the value of each symbol and complete the multiplication table

Symbol key:   

| | | | |
|---|---|---|----|
|  | ? | ? | ? |
|  | 3 | 6 | 12 |
|  | ? | 4 | ? |

Equation key:


-  = _____
-  = _____
-  = _____
-  = _____

Symbol key:   

| | | | |
|---|----|----|----|
|  | ? | 25 | ? |
|  | 21 | ? | 63 |
|  | ? | 15 | ? |







Equation key:





-  = _____
-  = _____
-  = _____
-  = _____









Answer Key

Find the value of each symbol and complete the multiplication table

| | | | |
|---|---|---|----|
|  |  |  | |
|  | 4 | 8 | 16 |
|  | 3 | 6 | 12 |
|  | 2 | 4 | 8 |

| | | |
|--|---|----------|
|  | = | <u>1</u> |
|  | = | <u>2</u> |
|  | = | <u>3</u> |
|  | = | <u>4</u> |

| | | | |
|---|---|---|----|
|  |  |  | |
|  | 15 | 25 | 45 |
|  | 21 | 35 | 63 |
|  | 9 | 15 | 27 |

| | | |
|--|---|----------|
|  | = | <u>3</u> |
|  | = | <u>5</u> |
|  | = | <u>7</u> |
|  | = | <u>9</u> |

