





# Fun With Math

Find the value of each symbol and complete the multiplication table

			
	49	70	?
	?	?	81
	?	?	0

	=	_____
	=	_____
	=	_____
	=	_____




			
	?	36	?
	?	12	?
	32	48	?

	=	_____
	=	_____
	=	_____
	=	_____







# Answer Key

Find the value of each symbol and complete the multiplication table

			
	49	70	63
	63	90	81
	0	0	0

	=	<u>10</u>
	=	<u>7</u>
	=	<u>0</u>
	=	<u>9</u>

			
	24	36	48
	8	12	16
	32	48	64

	=	<u>6</u>
	=	<u>4</u>
	=	<u>2</u>
	=	<u>8</u>

