


Fun With Math

Balance the tiles

Instruction: Switch one tile from A to B and another from B to A and make the product of the tiles equal for both A and B. Write your final answer on the tiles.


Make the product equal for both A and B



A			B		
12	X	8	9	X	6

A			B		
	X			X	

Make the product equal for both A and B



A			B		
48	X	8	12	X	2

A			B		
	X			X	

Answer Key

Balance the tiles

Instruction: Switch one tile from A to B and another from B to A and make the product of the tiles equal for both A and B. Write your final answer on the tiles.

Make the product equal for both A and B




Product = 72

A			B		
12	X	8	9	X	6

A			B		
12	X	6	9	X	8

Make the product equal for both A and B



Product = 96

A			B		
48	X	8	12	X	2

A			B		
48	X	2	12	X	8