


# Fun With Math

## Balance the tiles


**Instruction:** Switch one tile from A to B and another from B to A and make the sum of the tiles equal for both A and B. Write your final answer on the tiles.

**Make the sum equal for both A and B**



<b>A</b>	<b>B</b>	<b>A</b>	<b>B</b>
1,000	1,500		
1,200 300	1,800 200		

**Make the sum equal for both A and B**



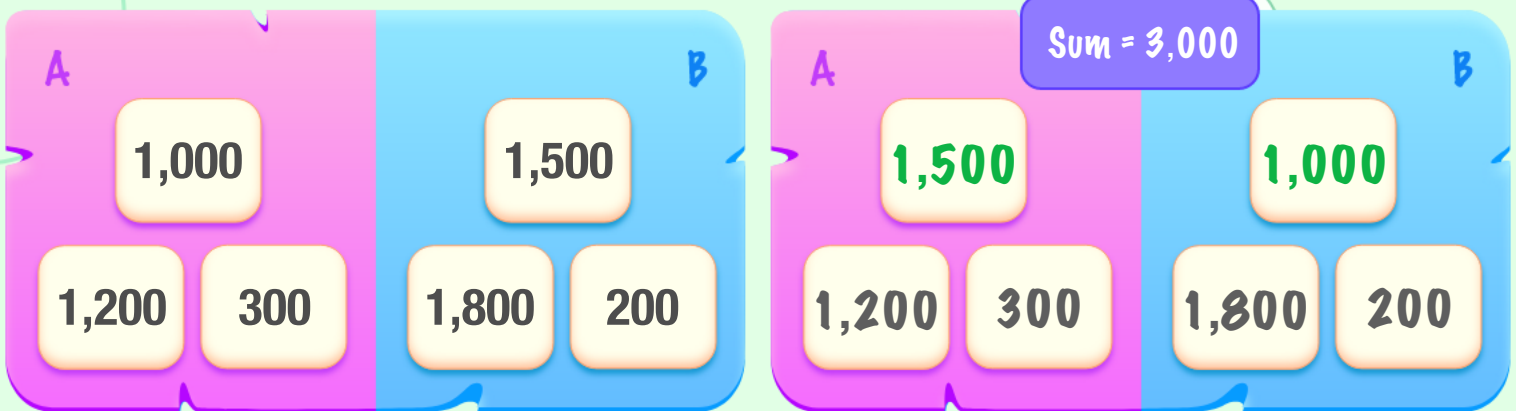
<b>A</b>	<b>B</b>	<b>A</b>	<b>B</b>
8,000	2,000		
2,500 5,500	7,000 5,000		

# Answer Key

## Balance the tiles

**Instruction:** Switch one tile from A to B and another from B to A and make the sum of the tiles equal for both A and B. Write your final answer on the tiles.

Make the sum equal for both A and B



Make the sum equal for both A and B

