









Fun with Math


Find the value of each symbol and complete the multiplication table

		
	?	?
	?	64
	48	?

	=	_____
	=	_____
	=	_____
	=	_____




		
	66	?
	?	5
	?	11

	=	_____
	=	_____
	=	_____
	=	_____







Answer Key

Find the value of each symbol and complete the multiplication table

			
180	120	60	
96	64	32	
48	32	16	

	=	<u>15</u>
	=	<u>12</u>
	=	<u>4</u>
	=	<u>8</u>

			
66	6	30	
55	5	25	
121	11	55	

	=	<u>1</u>
	=	<u>5</u>
	=	<u>11</u>
	=	<u>6</u>

