

# Fun With Math

Find the value of each symbol and complete the multiplication table







	64	?	?
	80	150	?
	?	?	144

	=	_____
	=	_____
	=	_____
	=	_____





	143	?	66
	?	?	36
	65	?	?




	=	_____
	=	_____
	=	_____
	=	_____






# Answer Key

Find the value of each symbol and complete the multiplication table

			
	64	120	96
	80	150	120
	96	180	144

	=	<u>8</u>
	=	<u>10</u>
	=	<u>12</u>
	=	<u>15</u>

			
	143	55	66
	78	30	36
	65	25	30

	=	<u>11</u>
	=	<u>5</u>
	=	<u>13</u>
	=	<u>6</u>

