





Fun with Math


Find the value of each symbol and complete the multiplication table

			
	?	28	?
	12	?	20
	?	?	100

	=	_____
	=	_____
	=	_____
	=	_____

			
	81	45	?
	0	?	?
	?	15	?

	=	_____
	=	_____
	=	_____
	=	_____











Answer Key

Find the value of each symbol and complete the multiplication table

			
	84	28	140
	12	4	20
	60	20	100

	=	<u>14</u>
	=	<u>2</u>
	=	<u>6</u>
	=	<u>10</u>

			
	81	45	27
	0	0	0
	27	15	9

	=	<u>0</u>
	=	<u>9</u>
	=	<u>3</u>
	=	<u>5</u>

