









Fun With Math

Find the value of each symbol and complete the multiplication table

			
	140	?	?
	?	126	?
	?	63	49

	=	_____
	=	_____
	=	_____
	=	_____

			
	?	?	0
	?	9	?
	?	39	26

	=	_____
	=	_____
	=	_____
	=	_____









Answer Key

Find the value of each symbol and complete the multiplication table

			
	140	90	70
	196	126	98
	98	63	49

 = <u>7</u>
 = <u>9</u>
 = <u>14</u>
 = <u>10</u>

			
	0	0	0
	39	9	6
	169	39	26

 = <u>13</u>
 = <u>3</u>
 = <u>2</u>
 = <u>0</u>

