





Fun with Math

Find the value of each symbol and complete the multiplication table

			
	?	?	100
	?	144	?
	84	?	140

	=	_____
	=	_____
	=	_____
	=	_____

			
	?	?	16
	1	?	?
	?	132	48

	=	_____
	=	_____
	=	_____
	=	_____



Answer Key

Find the value of each symbol and complete the multiplication table



60

120

100



72

144

120



84

168

140



$$= \underline{14}$$



$$= \underline{12}$$



$$= \underline{6}$$



$$= \underline{10}$$



4

44

16



1

11

4



12

132

48



$$= \underline{12}$$



$$= \underline{4}$$



$$= \underline{11}$$



$$= \underline{1}$$

