




# Fun With Math

Find the value of each symbol and complete the multiplication table

			
	100	150	0
	?	120	?
	?	?	?

	=	_____
	=	_____
	=	_____
	=	_____

			
	?	5	11
	9	?	?
	?	25	?



	=	_____
	=	_____
	=	_____
	=	_____




# Answer Key

Find the value of each symbol and complete the multiplication table

			
	100	150	0
	80	120	0
	150	225	0

	=	<u>10</u>
	=	<u>15</u>
	=	<u>8</u>
	=	<u>0</u>

			
	3	5	11
	9	15	33
	15	25	55

	=	<u>1</u>
	=	<u>3</u>
	=	<u>5</u>
	=	<u>11</u>

