



# Fun with Math


Find the value of each symbol and complete the multiplication table

			
	?	48	36
	168	?	?
	?	96	?

	=	_____
	=	_____
	=	_____
	=	_____

			
	?	16	?
	?	8	14
	?	?	42

	=	_____
	=	_____
	=	_____
	=	_____



# Answer Key

Find the value of each symbol and complete the multiplication table

			
	72	48	36
	168	112	84
	144	96	72

	=	<u>6</u>
	=	<u>8</u>
	=	<u>12</u>
	=	<u>14</u>

			
	8	16	28
	4	8	14
	12	24	42

	=	<u>7</u>
	=	<u>4</u>
	=	<u>2</u>
	=	<u>6</u>

