

Fun with Math

Find the value of each symbol and complete the multiplication table

Timers, Comb, Bell


		
?	?	45
30	?	90
?	?	81

 = _____
 = _____
 = _____
 = _____

Book, Open Book, Pin







		
8	?	?
?	32	?
1	?	2

 = _____
 = _____
 = _____
 = _____












Answer Key

Find the value of each symbol and complete the multiplication table

			
	15	50	45
	30	100	90
	27	90	81

 = <u>3</u>
 = <u>10</u>
 = <u>5</u>
 = <u>9</u>

			
	8	64	16
	4	32	8
	1	8	2

 = <u>1</u>
 = <u>8</u>
 = <u>4</u>
 = <u>2</u>

