






Fun With Math

Find the value of each symbol and complete the multiplication table

			
	196	?	?
	?	49	?
	?	28	32

	=	_____
	=	_____
	=	_____
	=	_____







			
	?	156	169
	?	180	?
	168	?	?

	=	_____
	=	_____
	=	_____
	=	_____





Answer Key

Find the value of each symbol and complete the multiplication table

			
	196	98	112
	98	49	56
	56	28	32

	=	<u>14</u>
	=	<u>4</u>
	=	<u>7</u>
	=	<u>8</u>

			
	182	156	169
	210	180	195
	168	144	156

	=	<u>15</u>
	=	<u>13</u>
	=	<u>14</u>
	=	<u>12</u>

