







# Fun With Math


Find the value of each symbol and complete the multiplication table

			
	?	121	99
	?	?	0
	?	66	?

	=	_____
	=	_____
	=	_____
	=	_____







			
	?	?	?
	?	70	?
	16	28	4

	=	_____
	=	_____
	=	_____
	=	_____










# Answer Key

Find the value of each symbol and complete the multiplication table

			
	66	121	99
	0	0	0
	36	66	54

 = <u>11</u>
 = <u>6</u>
 = <u>9</u>
 = <u>0</u>

			
	28	49	7
	40	70	10
	16	28	4

 = <u>10</u>
 = <u>4</u>
 = <u>7</u>
 = <u>1</u>

