

Fun With Math

Complete by finding the value of each symbol


$$\text{Ice Cream} + \text{Ice Cream} + \text{Hamburger} = \text{Cookie}$$


$$18 - \text{Cookie} = \text{Strawberry}$$


$$\text{Strawberry} \times \text{Strawberry} = 49$$


$$\text{Ice Cream} + \text{Ice Cream} = \text{Strawberry} + 1$$

$$\text{Hamburger} \times \text{Cookie} = ?$$

 = _____

 = _____

 = _____

 = _____



Answer Key

Complete by finding the value of each symbol


$$\overset{4}{\text{cupcake}} + \overset{4}{\text{cupcake}} + \overset{3}{\text{burger}} = \overset{11}{\text{cookie}}$$


$$18 - \overset{11}{\text{cookie}} = \overset{7}{\text{strawberry}}$$


$$\overset{7}{\text{strawberry}} \times \overset{7}{\text{strawberry}} = 49$$


$$\overset{4}{\text{cupcake}} + \overset{4}{\text{cupcake}} = \overset{7}{\text{strawberry}} + 1$$

$$\overset{3}{\text{burger}} \times \overset{11}{\text{cookie}} = 33$$

 = 11

 = 7

 = 3

 = 4

